

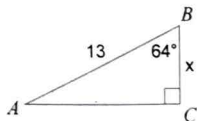
Assignment

Sah Cah Jax

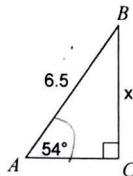
Date _____ Period _____

Find the measure of each side indicated. Round to the nearest tenth.

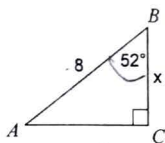
1)



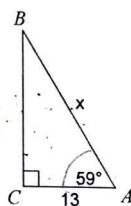
2)



3)

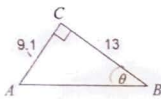


4)

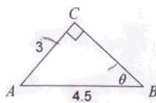


409
Find the measure of each angle indicated. Round to the nearest tenth. 5ch

5)



6)



Convert each degree measure into radians and each radian measure into degrees.

7) -85°

8) $\frac{3\pi}{4}$

9) $-\frac{29\pi}{36}$

10) -60°

11) -570°

12) 110°